




Position, direction and movement - 2 - Quiz A

Name:

Date:

WhiteRoseMaths

Which sort of a turn has been made by the car?



Then Now

☐ A ☐ B ☐ C ☐ D

Full turn Quarter turn Half turn No turn

© White Rose 2017

Correct Answer: A B C D

Explanation:

.....

.....

.....

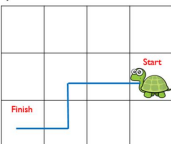
.....

.....

.....

WhiteRoseMaths

How many boxes has the turtle moved?



Start

Finish

☐ A ☐ B ☐ C ☐ D

3 4 5 8

© White Rose 2017

Correct Answer: A B C D

Explanation:

.....

.....

.....


.....

.....

.....

WhiteRoseMaths

Which of these words CAN NOT describe the turn made by the boy on his bike.



Then Now

☐ A ☐ B ☐ C ☐ D

Quarter turn Left turn Full turn Three quarter turn

© White Rose 2017

Correct Answer: A B C D

Explanation:

.....

.....

.....

.....


.....

.....


WhiteRoseMaths

Which image shows these changes to the picture below?

The pizza makes a full turn, the cupcake moves to the left of the bottle and the bottle makes a quarter of a turn.



A B C D



© White Rose 2017

Correct Answer: A B C D

Explanation:

.....

.....

.....

.....


.....

.....


WhiteRoseMaths

Forwards 1, turn right, forwards 2. Which image shows these directions?

A B



C D



© White Rose 2017

Correct Answer: A B C D

Explanation:

.....

.....

.....


.....

.....

.....

WhiteRoseMaths

The blue beanbag is _____ the green beanbag.



A above

B below

C behind

D Infront

© White Rose 2017

Correct Answer: A B C D

Explanation:

.....

.....

.....

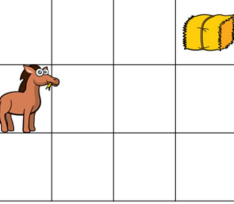
.....

.....

.....

WhiteRoseMaths

Which directions does the horse have to move in to get to the hay?



A left

B Forwards and right

C right

D Forwards and left

© White Rose 2017

Correct Answer: A B C D

Explanation:

.....

.....

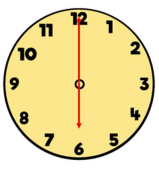
.....

.....

.....

.....

WhiteRoseMaths



For the hour hand to be in line with the minute hand it would need to move...

- A one full turn
- B half a turn
- C three quarters of a turn
- D one quarter of a turn

© White Rose 2017

Correct Answer: A B C D

Explanation:

.....

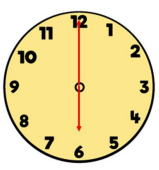
.....

.....

.....

.....

WhiteRoseMaths



For the clock to now show quarter to 7 which direction must the minute hand move in?

- A clockwise
- B backwards
- C anti-clockwise
- D It doesn't need to move

© White Rose 2017

Correct Answer: A B C D

Explanation:

.....


.....

.....

.....

.....

WhiteRoseMaths



The smallest pile of books is _____ the other books.

- A on top of
- B underneath
- C behind
- D to the right of

© White Rose 2017

Correct Answer: A B C D

Explanation:

.....

.....

.....

.....

.....