

























Name:

Date:

Use the information in the pictogram to complete the bar chart.

Group	Number of cupcakes eaten  = 5 cupcakes
Group 1	    
Group 2	    
Group 3	     
Group 4	  
Group 5	   

60					
55					
50					
45					
40					
35					
30					
25					
20					
15					
10					
5					
0					
	Group 1	Group 2	Group 3	Group 4	Group 5